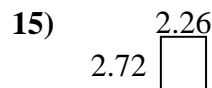
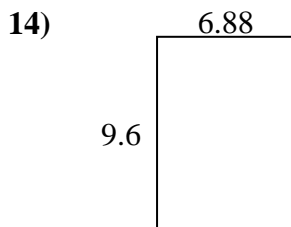

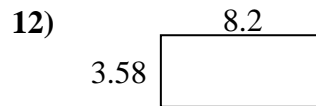
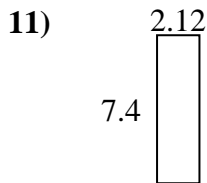
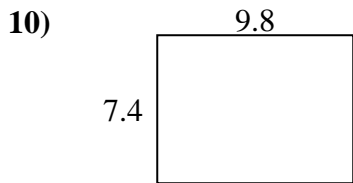
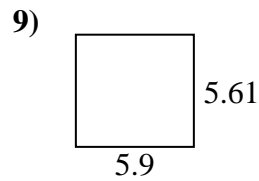
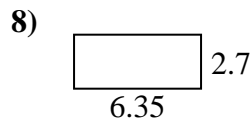
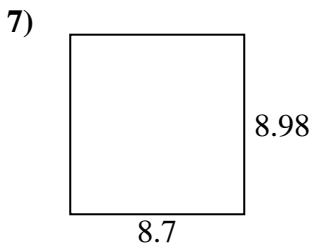
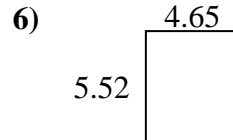
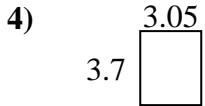
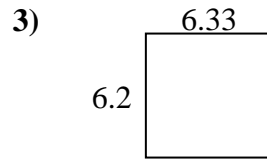
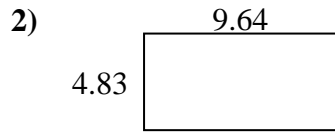
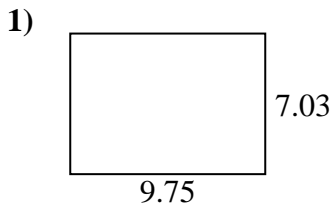




Find the perimeter and area of each figure. Answer to the nearest 10th.

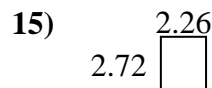
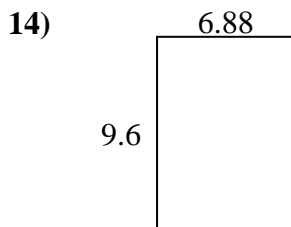

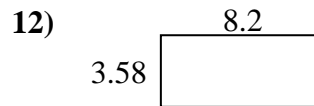
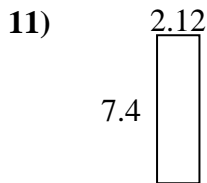
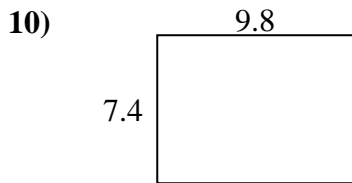
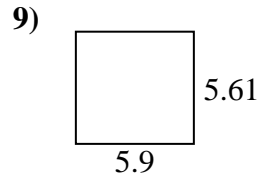
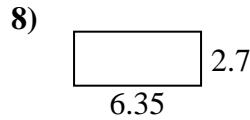
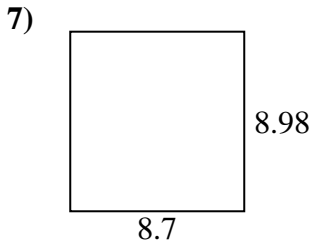
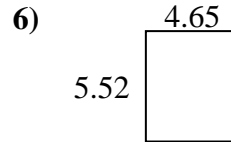
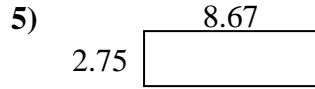
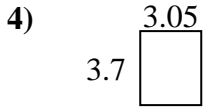
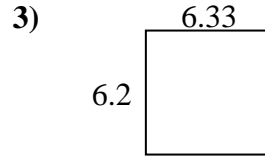
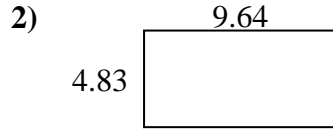
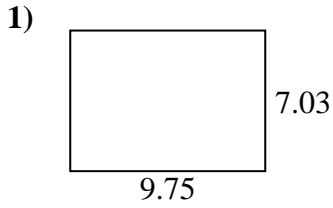
Answers



1. \_\_\_\_\_
2. \_\_\_\_\_
3. \_\_\_\_\_
4. \_\_\_\_\_
5. \_\_\_\_\_
6. \_\_\_\_\_
7. \_\_\_\_\_
8. \_\_\_\_\_
9. \_\_\_\_\_
10. \_\_\_\_\_
11. \_\_\_\_\_
12. \_\_\_\_\_
13. \_\_\_\_\_
14. \_\_\_\_\_
15. \_\_\_\_\_



Find the perimeter and area of each figure. Answer to the nearest 10th.



Answers

|     |             |             |
|-----|-------------|-------------|
| 1.  | <u>68.5</u> | <u>33.6</u> |
| 2.  | <u>46.6</u> | <u>28.9</u> |
| 3.  | <u>39.2</u> | <u>25.1</u> |
| 4.  | <u>11.3</u> | <u>13.5</u> |
| 5.  | <u>23.8</u> | <u>22.8</u> |
| 6.  | <u>25.7</u> | <u>20.3</u> |
| 7.  | <u>78.1</u> | <u>35.4</u> |
| 8.  | <u>17.1</u> | <u>18.1</u> |
| 9.  | <u>33.1</u> | <u>23.0</u> |
| 10. | <u>72.5</u> | <u>34.4</u> |
| 11. | <u>15.7</u> | <u>19.0</u> |
| 12. | <u>29.4</u> | <u>23.6</u> |
| 13. | <u>12.0</u> | <u>14.4</u> |
| 14. | <u>66.0</u> | <u>33.0</u> |
| 15. | <u>6.1</u>  | <u>10.0</u> |